



# INDIAN SCHOOL AL WADI AL KABIR

DEPARTMENT OF MATHEMATICS (2024-2025)


TOPIC: HANDLING DATA






















RECALL WORKSHEET

RESOURCE PERSON: MS. MANJULA HARINARAYANAN

NAME: \_\_\_\_\_ CLASS: IV SEC: \_\_\_\_\_ DATE: \_\_\_\_\_

I. The following pictograph shows the attendance in a class for a week.

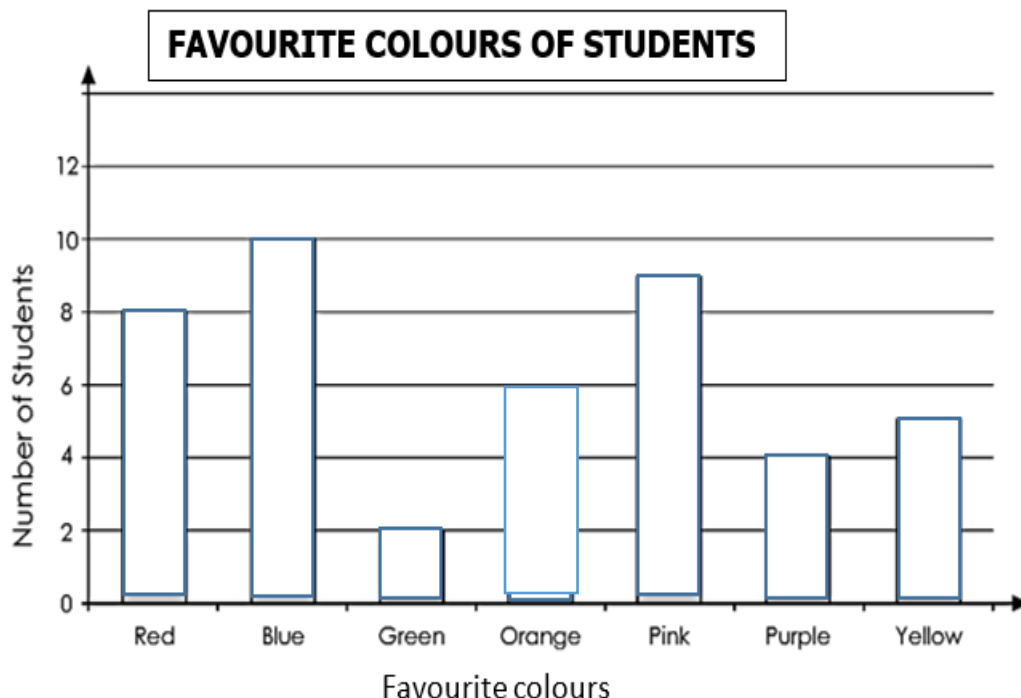
Key  = 5 students

Days	Number of Students present
Sunday	      
Monday	    
Tuesday	     
Wednesday	
Thursday	  
Total strength of the class = 38	

Study the above pictograph and answer the following questions.

- 1) How many students were absent on Monday? \_\_\_\_\_
- 2) How many students were present on Tuesday? \_\_\_\_\_
- 3) Given that 30 students were present on Wednesday, complete the pictograph by drawing the emojis.
- 4) On which day, was the maximum number of students present and how many?  
\_\_\_\_\_, \_\_\_\_\_
- 5) The maximum number of students took leave on \_\_\_\_\_.

**II. The bar graph given below shows the favourite colours of students in a class. Colour the bars according to the chosen colours and answer the following questions.**



- 1) How many students chose orange as their favourite colour? \_\_\_\_\_
- 2) Which is the favourite colour of most of the students? \_\_\_\_\_
- 3) How many more students chose red than yellow? \_\_\_\_\_
- 4) Name the colour chosen by 9 students. \_\_\_\_\_
- 5) Which is the least chosen colour of students? \_\_\_\_\_.
- 6) Five students chose the purple colour. True/False? \_\_\_\_\_
- 7) List the colours in descending order from the most chosen colour to the least.  
\_\_\_\_\_
- 8) What is the title of this bar graph? \_\_\_\_\_